

1. Work out $16.2 + 5.78$

.....
(1 mark)

2. Work out $21.6 - 8.21$

.....
(1 mark)

3. Work out 3.1×42

.....
(2 marks)

4. Work out $\pounds 11.55 \div 5$

.....
(2 marks)

5. Round 4521.3 to the nearest 100

.....
(1 mark)

6. Work out $-7 + (-3)$

.....
(1 mark)7. What is $\frac{3}{5}$ of 15.....
(1 mark)

8. Find 30% of 25

.....
(1 mark)9. Convert $\frac{1}{3}$ to a decimal.....
(1 mark)

10. Calculate $4^2 - \sqrt{49}$

.....
(2 marks)

11. Write down the nth term

7, 12, 17, 22, 27

.....
(2 marks)

12. Simplify

$$\frac{15}{35}$$

.....
(1 mark)

Name : Class..... Score.....

13. Simplify $6a + 2a^2 - 3a + 4a^2$

.....
(2 marks)

14. Simplify $5h \times 8h$

.....
(1 mark)

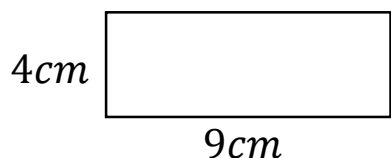
15. Expand $3(8a - 1)$

.....
(2 marks)

16. Write down all the factors of 24

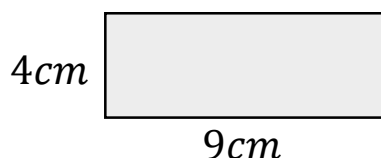
.....
(1 mark)

17. Calculate the perimeter



.....
(1 mark)

18. Calculate the area



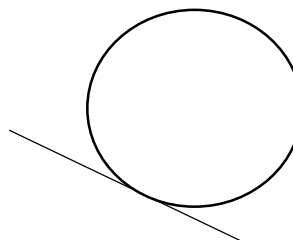
.....
(1 mark)

19. Name this shape




.....
(1 mark)

20. Name this part of a circle



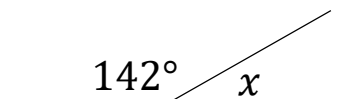
.....
(1 mark)

21. Draw all the lines of symmetry



(1 mark)

22. Calculate x



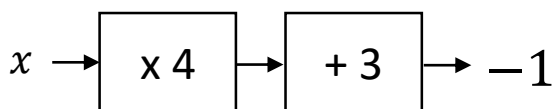
$x = \dots\dots\dots$
(1 mark)

23. Workout

$$11^2 - 3 \times 4$$

.....
(2 marks)

24. Solve



$x = \dots\dots\dots$
(1 mark)